

**SRI KANCHI MAHASWAMI VIDYAMANDIR**  
**ANIMALS AND BIRDS**

**CLASS:V**

**TASK : 1**

**I. Fill in the male gender to match its female partner:**

<b>Cock-pigeon</b>	<b>colt</b>	<b>stallion</b>	<b>fox</b>	<b>buck[ hamster]</b>
<b>Drake</b>	<b>drone</b>	<b>gander</b>	<b>he- bear</b>	

- |                     |                   |
|---------------------|-------------------|
| 1. goose _____      | 2. Queen _____    |
| 3. doe _____        | 4. Mare _____     |
| 5. hen-pigeon _____ | 6. Filly _____    |
| 7. duck _____       | 8. She-bear _____ |
| 8. vixen _____      |                   |

**II. Write a sentence with the opposite animal genders:**

1. Turkey-hen

\_\_\_\_\_

2. Peahen

\_\_\_\_\_

3. tigress

\_\_\_\_\_

**III. Are these correct ?If not ,write them correctly.**

- |                 |               |       |
|-----------------|---------------|-------|
| 1. billy-goat   | nanny-goat    | _____ |
| 2. cow- seal    | buck-seal     | _____ |
| 3. cow-whale    | bull- whale   | _____ |
| 4. cow-elephant | bull-elephant | _____ |
| 5. Tom-cat      | queen-cat     | _____ |

**SRI KANCHI MAHASWAMI VIDYAMANDIR**  
**ANIMALS AND BIRDS**

**CLASS:V**

**TASK : 2**

1. Three birds are chirping at regular intervals. The first bird chirps every 6 seconds, the second bird chirps every 8 seconds and third bird chirps every 10 seconds. When will the three birds chirp together again?



2. The ratio of lions to tigers in a zoo is 1:3. If there are 4 lions, how many tigers will be there?



3. A snail can move a distance of 2.562 meters in 4 hours. What distance can it travel in 10 hours?

4. Divya spent 2  $\frac{1}{2}$  hours watching birds on Saturday and 1  $\frac{3}{4}$  hours watching birds on Sunday. How many hours over the weekend did Divya spend bird watching?



5. A herd of cow gives 4 litres of milk each day. But each cow gives one-third of total milk each day. They give 24 litres milk in six days. How many cows are there in the herd?

6. A huge frog ate 140 big bugs in 5 days. Each day, it ate 8 more bugs than it did on the previous day. How many bugs did the frog eat on

(a) the first day? \_\_\_\_\_

(b) the fifth day? \_\_\_\_\_

7. If a cow gives 143 litres of milk in 13 days, how much milk does it give in 5 days?

**தலைப்பு: பறவைகள் மற்றும் விலங்குகள்**  
படத்தை உற்று நோக்கி பறவைகள் மற்றும் விலங்குகளின் பெயர்களை எழுது.



திருநெல்வேலி மாவட்டத்தில் ஒரு சிற்றூர் கூந்தன்குளம். அவ்வூர் மக்கள் எந்த ஒரு நிகழ்ச்சிக்கும் பட்டாசே வெடிப்பது இல்லை. அதற்கான காரணம் என்ன என்று படத்தை உற்று நோக்கி எழுதுக.



**SRI KANCHI MAHASWAMI VIDYAMANDIR**

**ANIMALS & BIRDS**

**CLASS : V**

**TASK- 4**

I. खतरनाक जानवरों क नाम पर गाला लगाइए।

भस	चोता	बकरो	कत्ता	बिल्लो	चहा
साँप	बिच्छ	कछआ	कचआ	तिलचट्टा	
कबतर	भाल	हाथो	बाघ	मगर	

II. नोच दिए गए चित्र दखकर उनम छिप हए जानवर आर पक्षिया क नाम लिखिए।









**SRI KANCHI MAHASWAMI VIDYAMANDIR**  
**ANIMALS AND BIRDS**

**CLASS:V**

**TASK : 5**

invertebrate   vertebrate   four   five   birds   fish   reptiles   mammals  
amphibians   insects   mollusks   octopus   squid   gills   lungs   warm  
cold   birds   exoskeleton   arthropods   sea-urchin  
worms

- 1) An animal that has a backbone is called a \_\_\_\_\_ and an animal without a backbone is called an \_\_\_\_\_.
- 2) There are \_\_\_\_\_ main groups of vertebrates and \_\_\_\_\_ main groups of invertebrates.  

- 3) The five main groups of vertebrates are m \_\_\_\_\_, r \_\_\_\_\_, f \_\_\_\_\_, a \_\_\_\_\_ and b \_\_\_\_\_.  

- 4) \_\_\_\_\_ like ants and bees are invertebrates.
- 5) Slugs and snails are \_\_\_\_\_ that live on land and o \_\_\_\_\_, s \_\_\_\_\_ and cuttlefish are mollusks that live in the sea.
- 6) Mammals breathe using \_\_\_\_\_ and fish breathe using \_\_\_\_\_.
- 7) Most reptiles and fish are \_\_\_\_\_ -blooded.  

- 8) Mammals and birds are \_\_\_\_\_ -blooded.
- 9) \_\_\_\_\_ and \_\_\_\_\_ lay eggs. All invertebrates lay eggs.  

- 10) Scorpions, spiders, crabs and insects are called \_\_\_\_\_ because they have hard bodies called an \_\_\_\_\_ and jointed legs.  
